

**Subject: English**  
**(Revision Paper Class-III)**

1. Answer the following question.

- a) How did husky feel when he had the bane?
- b) Why was Padmini weak?
- c) How could Benjamin draw so well?
- d) How does the speakers know about night?
- e) What is the wonderful gift in this lesson?

2. Answer in one words only.

- a) Which bird did boy caught in sack?
- b) Who groomed golden bird feather in the place?
- c) What do tall-tree watch up in the sky?
- d) How was Benjamin drawing?
- e) Who came to benjamin's house?

3. Make sentences.

- a) Storm    b) dress    c) lovely    d) bookshelf    e) flatters

4. Give five countable and uncountable nouns.

5. Give groups of animals

- a) A \_\_\_\_\_ of bees
- b) A \_\_\_\_\_ of sheep
- c) A \_\_\_\_\_ of cows
- d) A \_\_\_\_\_ of fish
- e) A \_\_\_\_\_ of puppies

6. Give plural words.

- a) knife            b) feet            c) book            d) shelf            e) sheep

7. Change the gender.

- a) nephew            b) hero            c) uncle            d) king            e) horse

8. Do it, as it is directed.

- a) Those frocks are our/ours (tick right word).
- b) These toy are mine/my (tick right word).
- c) Please meet me in \_\_\_\_\_hour (use 'a' or 'an').
- d) The princess wore a \_\_\_\_\_ dress (suitable adjective).
- e) I met my friend in the park. (Make question using, whom, what or which).
- f) Agra is on \_\_\_\_\_ bank of Yamuna.(use 'a', 'an' or 'the').

9. Outline if the story is given, complete it-2.

There-once-old tree- a farmer's garden.

It-not-bear fruit anyone. A large-of-insects animals-birds-in the trees.

One-farmer decided-cut down-tree.

He took-sharp axe-struck at-roots of-tree.

All-birds-animals came out-their holes-nests.

All-birds-animals requested-to not cut-tree.

They-sing-for him, when-words-feel him happy.

10. Write 8 lines on 'your favorite fruit'.

11. Do diary entries of your holidays.

\*\*\*\*\*

# Subject: EVS

## (Revision Paper Class-III)

### A. Tick the correct Option.

- i. Which among these is the fastest way to send written message and photograph?  
a) Postcard  
b) Telegram  
c) E-mail  
d) Fax
- ii. Which organ in our body help to provide sound?  
a) Nose  
b) Eyes  
c) Voice  
d) Larynx
- iii. Tankaa is water storage in \_\_\_\_\_.  
a) Punjab  
b) Rajasthan  
c) Delhi  
d) Kolkata
- iv. To and fro movement related to  
a) Force  
b) Vibration  
c) Work  
d) Energy
- v. Fastest and costliest means of transport is?  
a) Helicopter  
b) Hot air balloon  
c) Aero plane  
d) Boat
- vi. A mean of communication, which we use now-a-day to get the desired information whenever we want, is \_\_\_\_\_.  
a) Radio  
b) Television  
c) Internet  
d) Telephone
- vii. In rain bow we seen a set of color which is known as  
a) VIBGYOR  
b) VIGBYOR  
c) BIGVYOR  
d) YORBIGV
- viii. The main direction are  
a) Six  
b) Eight  
c) Four  
d) Ten

### B. Put a ( ✓ ) for correct and ( x ) for wrong statement

- i. Drinking water should be stored in an open container.
- ii. Coal is an example of liquid fuel.
- iii. CNG is cheapest and less polluted fuel.
- iv. The post man delivers letters at our home.
- v. Sital, Guitar and violine are string instruments.

### C. Fill in the blanks :

- i. A train runs on \_\_\_\_\_. (Rails / Road)
- ii. Plant absorb water from the\_\_\_\_\_ ( Air/ Soil)
- iii. A\_\_\_\_\_is a rectangular piece of thick paper or thin card board. (Postcard/ Aerogramme)

iv. \_\_\_\_\_absorb water from the soil and provide I to all other parts of the plant.(Stem /Roots)

v. Auto rickshaw has \_\_\_\_\_.Wheels (3/4)

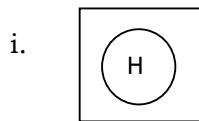
D. Answer the following question in (1-2 sentences).

- i. Write the full form of MMS and SMS?
- ii. What is the difference between postcard and inland?
- iii. What is Tankaa?
- iv. Make a flow chart of rain water harvesting.
- v. Give the importance of pin code.

E. Explain the answer in 3-4 sentences.

- i. Mean of communication has made the world maller do you agree? why.
- ii. What is the importance of cooked food?
- iii. List five benefits of a row food diet.
- iv. Write down the cultural value of water.
- v. Why is CNG preferred over petrol

F. Identify the symbols:



\*\*\*\*\*

# Subject: Math

## (Revision Paper Class-III)

### Q.1 Solve the following:-

(a) Color  $\frac{1}{4}$  of them:-



(b) Fill up:-

(i)  X  = 28

(ii)  X  = 64

(c) Write fact family for:-

(i)  $48 \div 6 = 8$  (ii)  $7 \times 5 = 35$

(d) (i) Arrange and solve :-  $96 \div 4$

(ii) Which gives the product 125

a)  $15 \times 9$

b)  $25 \times 5$

c)  $10 \times 25$

d)  $5 \times 12$

e) (i) Draw a Square and shade its  $\frac{1}{4}$  portion.

(ii) Draw a triangle and shade its  $\frac{1}{3}$  portion.

(iii) Draw 8 circles and color  $\frac{1}{2}$  of them.

f) (i) Form a word problem using information  $81 \div 9$ .

(ii) Write a four – digit number greater than 5000 and less than 6000 having same face value.

g) Arrange and solve and write quotient and remainder:-

(i)  $469 \div 4$

(ii)  $578 \div 12$

h) Which of the following can not be divided in equal halves ?

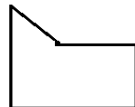
i)

ii)

iii)



iv)



i) These are 500 caps in a shop. A shopkeeper sold equal number of shops in 5 days. How many caps he sold in each day?

j) Form a 4- digit even number using digits 5,0,1,6 without repeating digits also write its number name.

k) Rama has 512 cookies in 8 boxes. How many cookies are these in

each box?

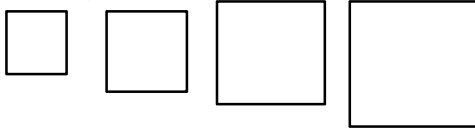
l) Arrange and solve by long division method  $848 \div 8$

### Q. 2) Solve the following:-

(a) Raman distributed 3956 blankets and 1867 food items to the 'Asha' old age home.

- i) How many things are distributed by Raman?
- ii) What is the value shown by Raman?

(b) Arrange in increasing order  $6105 + 2150$ ,  $7800 - 4160$ ,  $430 \times 5$ ,  $36 \times 9$



c) i) Write a word problem using information :-  $8511 - 2586$

ii) Write division fact for :-  $7 \times 9 = 63$

d) Estimate and solve :-

i)  $562 - 175$

ii)  $416 \times 15$

### Q.3) Solve the following:-

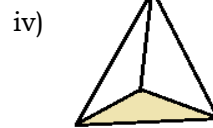
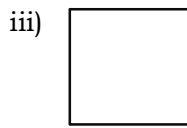
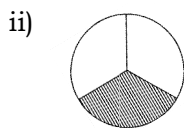
a) Ratan has 56 boxes of strawberries. Each box has 8 strawberries. how many strawberries are in 56 such boxes?

- b) i) Write a multiplication fact with an example.
- ii) Write a division fact with an example.

c) Divide a triangle in 4 equal parts, shade its one part. Write the fraction of the shaded part.

d) Mita solves the information  $34 \times 15$  using lattice algorithm. show mita's work.

e) Tick mark the odd one :-



f) Identify them:-

here,  $12 \div 4 = 3$

12 is \_\_\_\_\_ 4 is \_\_\_\_\_ 3 is \_\_\_\_\_  $\div$  is \_\_\_\_\_

\*\*\*\*\*

## Subject: Hindi

### (Revision Paper Class-III)

1. निम्नलिखित प्रश्नों के उत्तर के लिये सही विकल्प चुनकर लिखे :-

- i ) कखी चोट तो नही लगी ?  
क) गौरव    ख) राघव    ग) बचचे
- ii ) एक वर्ष में कितने दिन होते है।  
क) 300 दिन    ख) 365 दिन    ग) 366 दिन
- iii ) बालिका किसके साथ खेलेली?  
क) किरण    ख) खिलौने    ग) परी
- iv ) बूंदों का जल कैसा है ?  
क) गरम और मीठा    ख) ठंडा और नन्हा    ग) शीतल और मीठा
- v ) इन्द्रधनुष में कितने रंग होते हैं?  
क) तीन    ख) सात    ग) अनेक

2. किसने किससे कहाँ ?

- क ) 'छोटी मुहं बड़ी बात ! अपनी ऊम्र तो देखो ।'  
ख ) तू उठकर इतनी जल्दी आज चली आई.  
ग ) दिखता नही तो सड़क पर क्यों चलते हो ?  
घ ) कल तो तेरे साथ शाम तक खेल बहुत से खेलेली मैं ?

3. निम्नलिखित प्रश्नों के उत्तर एक-एक वाक्य में लिखो ?

- क) किसने किसको जगाया?  
ख) रवीन्द्र ने पिंजरे के पक्षियों का क्या किया ?  
ग) बूँदे कैसी हैं?  
घ) आज मेरी छुट्टी हैं।  
ड.) अंडा कहाँ पड़ा था ?  
च) गौरव में क्या कमी थी ?

4. निम्नलिखित प्रश्नों के उत्तर दो- तीन वाक्य में लिखें :-

- क) सुबह किरण किसके साथ आती हैं ,और शाम को किसके साथ चली जाती हैं?  
ख) रवीन्द्र को क्या भाते थे और क्या देखकर रवीन्द्र का मन दुखी हो जाता था ?  
ग) नन्ही बूँदे बूँदे प्राणियों को जीवन देती हैं। कैसे लिखिए !  
घ) इल्ली के पेट का दर्द कैसे ठीक हुआ?  
ड.) राघव की आँखों में दर्द क्यों हुआ ?

5. निम्नलिखित शब्दों के समानार्थी शब्द लिखो?

- क) टहनी    ख) पंक्ति    ग) पेड़    घ) घर    ड.) संसार

6.

क) निम्नलिखित शब्दों के विलोम शब्द बताए:-

( साफ , मित्र , धरती , हँसना ,बड़ा ,कोमल ,परिश्रमी , खुशबू )

ख) निम्नलिखित शब्दों में से संज्ञा शब्द चुनकर लिखो :-

( रजत ,लालकिला ,वह ,तुम ,मेज ,पवन , लखनऊ , उसका ,मेरा ,राजा )

ग) निम्नलिखित शब्द के समानार्थी शब्द लिखे :-

(दिन ,वर्षा ,सुबह ,धरती ,पत्र,रात,चाँद ,आकाश )

घ) निम्नलिखित वाक्यों में से क्रिया शब्द चुनकर लिखे :-

क) वह खा रहा है।

ख) बंदर पेड़ पर बैठा है।

ग) सीमा नाच रही है।

घ) रोहन ने गाजर का हलवा खाया।

ड.) बुँदे बरस रही हैं।

ड.) निम्नलिखित शब्दों से वाक्य बनाइए :-

(i) इन्द्रधनुष (ii) आसमान (iii) वर्षा (iv) ककून (v) किरन

7.चित्र को देखे और उसके नीचे लिखे: (चित्र – वर्णन)



\*\*\*\*\*