

Subject: Hindi
(Revision Paper Class-1)

1. जीवों के घरों के नाम लिखे :-

- i) आदमी
- ii) साँप
- iii) शेर
- iv) बंदर

2. ओ , ई , ऊ की मात्रा ○ घेरा करे :-

राजा, गुलाब, झुला, पालतू, कुत्ता, आँख, मछली, किसान, कछुआ, दही
पकड़ी, मामी, लालू, ओखली, जोड़, ओस



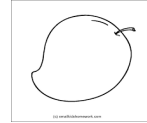
3. 'च' वर्ग के शब्दों पर ○ घेरा करे :-

छाता, कमल, घर, जहाज, चरखा, नदी, झंडा, लड़का, चम्मच.

4. खाली स्थान को भरों :-

- | | | |
|-----------|-------------|-----------|
| i) न __ | iii) क __ ल | v) ज __ ज |
| ii) रा __ | iv) आ __ | vi) र __ |

5. चित्र को पहचानकर उनके नाम लिखो :



6. चित्र देखकर सही जोड़े मिलाये :-

घर



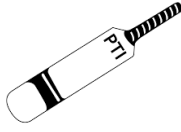
कार



लड़का



सूरज



चिड़ियाँ



बैट



बॉल



पेड़



7) एक शब्द के लिए अनेक शब्द लिखें:-

i) कलम _____ ii) मुर्गा _____ iii) पैसा _____

iv) गाड़ी _____ v) केला _____ vi) आँख _____

8) लड़कावाले शब्द से लड़की वाले शब्द को मिलाये :-

i) चूहा ii) बकरा iii) औरत iv) दादी v) शेर

i) आदमी ii) शेरनी iii) चुहिया iv) बकरी v) दादा

9) सही शब्द चुनकर खाली जगह को भरे :-

i) सीमा एक _____ लाई | (गुलाब, गूलाब)

ii) चिड़िया _____ लाई | (लड़की , लड़की)

iii) आमवाला _____ आम लाया | (आठ, आत)

10) काम वाले शब्द को गोल घेरे :-

चूहा , गुलाब, दौड़ना फुल, हंसी , बैठना , घोसला, आगरा , रोना

11) बाद वाले अक्षर लिखे :-

ज ____, भ ____, य ____, ठ ____, उ ____,

ग ____, ल ____, द ____, क ____, र ____,

12) कौन कैसा है और कितना है बताये :-

i) हाथी _____ ii) फूल _____ iii) पैर _____

iv) पता _____ vi) नाक _____.

13) सही शब्द से खाली जगह को भरे :-

i) यह थरमस _____ हैं | (उसकी, तुम)

ii) _____ मोहन की पुस्तक हैं | (यह, वह)

iii) गिलास _____ हैं (मेरा, तुम)

iv) _____ कहाँ जा रहे हो ? (आप, तुम)

Subject: Math

(Revision Paper Class-1)

1. Add the following:

a)

T	O
2	0
+	1 2
	1 1
	<u>2</u>

b)

T	O
2	4
+	1 3
	1 2
	<u>1</u>

c)

T	O
1	5
+	1 0
	<u>1</u>

2. Subtract the following:

a)

T	O
8	5
-	1 5

b)

T	O
5	5
-	2 6

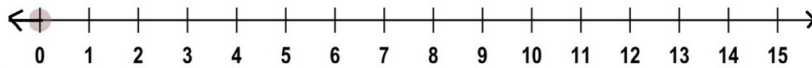
c)

T	O
	9 7
-	<u>5</u>

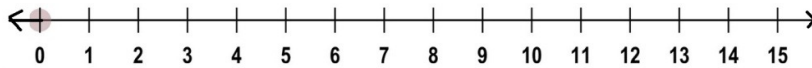
3. Solve the following:

a) Number line add or subtract:

(i) $9+2=$



(ii) $8-4=$



b) Draw the given number of square next to the number. Make groups of ten and add

(i) 15
 $+ 5$

(ii) 10
 $+ 3$

c) Put > or < or = in the box.

(i) Six tens two ones two tens five ones

(ii) $44+22$ $50-20$

d) Subtract tens and find the answer. Each Square equals.

(i) 50
 20

(ii) 20
 10

- e) Write two pairs of numbers such that their addition is greater than 3 but less than 5.



4. Solve the following:

a) write the expanded numbers:

(i) $78+2=$ _____tens+_____ones=_____.

(ii) $55=$ _____tens + _____ones.

b) Tick the shape inside the box.




c) Tick the kite that is above the tree.




d) Rearrange, starting from the biggest to smallest number.

- (i) 90,15,20,100,5



d) Rearrange, starting from the smallest to biggest number.

- (i) 12,60,28,10



5. Solve the following:

a) Write the number name by counting the beads.

0000000000	<input type="text"/>
0000000000	<input type="text"/>
0000000000	<input type="text"/>
0000	<input type="text"/>

b) Write the place value of 5 in following:

(i) 35: _____

(i) 51: _____


c) Tanu want to take trophy:

(i) How can she take it.

She climb up the stairs/She climb down the stairs.

(ii) What value shown by this.

_____ .



d) Ram had 25 pens. Sam give him 5 more. How many pen in all does ram have?

e) Sita bought 8 pens. and 4 erasers.

(i) How many stationery items did she buy in all?

(ii) If she used 3 pens and 3 erasers, then how many stationary items are unused in all?

f) There are 19 books in bag. Rohan took of them. How many books remains in the bag?

Subject: EVS
(Revision Paper Class-1)

1. Tick the correct.

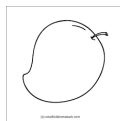
- i. Which clothes are worn in winter season?
a. Jacket, T-shirt
b. Jeans, T-shirt
c. Jacket, Sweater
d. Cap, T-shirt
- ii. Which one is an insect?
a. Crow
b. Butterfly
c. Canary
d. Cow
- iii. Identify odd one.
a. Octopus
b. Seal
c. Crow
d. Whole

iv. Name of the leaves are



- a. Money plant, Cactus
b. Cactus, Banana Leaf
c. Rose, Cactus
d. Rose, Banyan leaf
- v. Water animal lives in the _____.
a. Sand
b. Water
c. Land
d. Tree
- vi. Which one is creeper?
a. Pea
b. Pumpkin
c. Money plant
d. Mint
- vii. Identify the pet animals.
a. Cow, Goat
b. Buffalo, Goat
c. Dog, Cat
d. Banana, Mango

viii. Identify these fruits



- a. Apple, Mango
b. Mango, Grapes
c. Mango, Guava
d. Banana, Mango




2. Fill in the blanks:

- i. Wheat corn and _____ are cereals. (Rice / Cabbage).
- ii. Name a flower that we eat _____. (Cauliflower/Rose).
- iii. Birds can fly with their _____.(Wings/Feathers).
- iv. We live in the house for protection and _____.(Shelter/Privacy).
- v. We wear _____ in the winter season.(T-shirt/Jacket).

3. Tick (✓) for correct and (x) for wrong statements.

- i. Cat and dogs are pet animals.
- ii. We wear the same clothes for all seasons.
- iii. If we make clothes from paper, they will last long.
- iv. Food keeps us healthy.
- v. Plant takes water from soil.

4. Match the following:

- i.  a. Rainy Season
- ii.  b. Winter season
- iii.  c. Summer season

5. Identify- Flower, Root and Leaf.

- i.  Spinach
- ii.  Cauliflower
- iii.  Beet root

6. Answer the following question in 1-2 sentences.

- i. What are creepers?
- ii. Name three things that grow on a plant.
- iii. Name four of your favorite's food items.
- iv. What are farm animals?
- v. Where do we take our bath?

7. Answer the following question in 3-4 sentences.

- i. Give the two examples of each
 - a. Herb
 - b. Clothes we wear in winter.
- ii. Why do we live in a house?
- iii. Why do we wear clothes?
- iv. Write any one reason why should we eat food.